

Nome: _____

1 – Completa os exercícios com as tabuadas que já conheces:

5 X 2 = 6 X 2 = 7 X 2 = 8 X 2 =




2 X 2 = 3 X 2 =




10 X 2 =

9 X 2 =

2 X 4 =
3 X 4 =



5 X 4 = 6 X 4 =




Tabuada do 3

1 X 3 =
2 X 3 =
3 X 3 =
4 X 3 =
5 X 3 =
6 X 3 =
7 X 3 =
8 X 3 =
9 X 3 =
10 X 3 =



7 X 4 = 8 X 4 =



2 X 5 = 3 X 5 = 4 X 5 = 5 X 5 =